


Name _____


Sea Life Subtraction

Solve. Draw an X on the pictures that are subtracted.


$5 - 2 = \underline{\quad}$




$6 - 1 = \underline{\quad}$




$10 - 5 = \underline{\quad}$



$3 - 2 = \underline{\quad}$



$4 - 3 = \underline{\quad}$



$7 - 5 = \underline{\quad}$

